

O. P. JINDAL SCHOOL, SAVITRI NAGAR
SECOND ASSESSMENT (2023-24)

Class / Section: K G II [A / B]

MM: 20

Subject: Maths

Time: 1Hr30mins

Name: _____

Roll No.: _____

Date: _____

Invigilator Sign: _____

Marks Obtained: _____

Examiner Sign: _____

I. Write the number names of:

($\frac{1}{2} \times 4 = 2$ Marks)

(i) 58 _____

(ii) 100 _____

(iii) 85 _____

(iv) 74 _____

II. Addition:

($\frac{1}{2} \times 4 = 2$ Marks)

$$\begin{array}{r} 26 \\ + 31 \\ \hline \end{array}$$

$$\begin{array}{r} 40 \\ + 40 \\ \hline \end{array}$$

$$\begin{array}{r} 51 \\ + 17 \\ \hline \end{array}$$

$$\begin{array}{r} 61 \\ + 24 \\ \hline \end{array}$$

III. Subtraction:

($\frac{1}{2} \times 4 = 2$ Marks)

$$\begin{array}{r} 9 \\ - 6 \\ \hline \square \end{array}$$




$$\begin{array}{r} 7 \\ - 7 \\ \hline \square \end{array}$$

$$\begin{array}{r} 8 \\ - 6 \\ \hline \square \end{array}$$

$$\begin{array}{r} 5 \\ - 2 \\ \hline \square \end{array}$$

IV. Colour the given ordinal numbers:

($1 \times 3 = 3$ Marks)



V. Fill in the missing numbers:

($\frac{1}{2} \times 6 = 3$ Marks)

	65	66		68
86		88		90
96		98	99	


VI. Match the following:

(1×4= 4 Marks)

(i) Oval



(ii) Cone



(iii) Rectangle



(iv) Star



VI. Match the currency with their right names:

(1/2 × 4 = 2 Marks)

(i)



50 Rupee Note

(ii)



1 Rupee Coin

(iii)



100 Rupee Note

(iv)



5 Rupee Coin

VII. Write the time shown in the clock in the below given space:- (1×2=2Marks)

